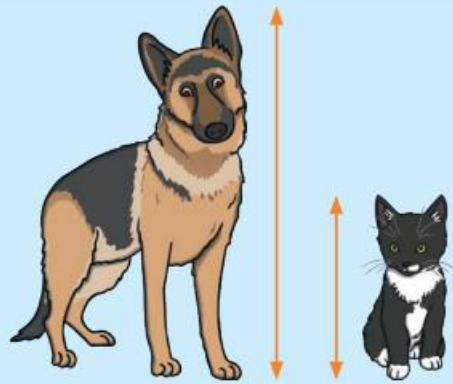


Knowledge Organiser: Entry 1

Height

The dog is **taller** than the cat.

The cat is **shorter** than the dog.



tallest

shortest

Length



The car is **shorter** than the train.

The train is **longer** than the car.

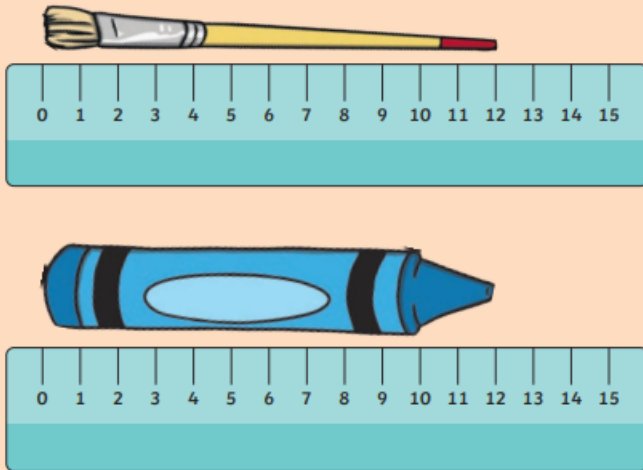
shortest

longest

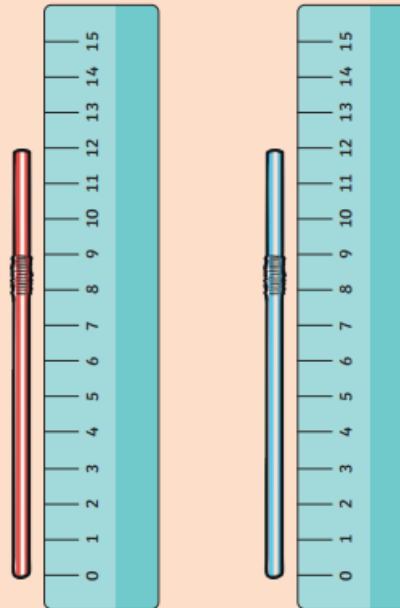


Length and Height

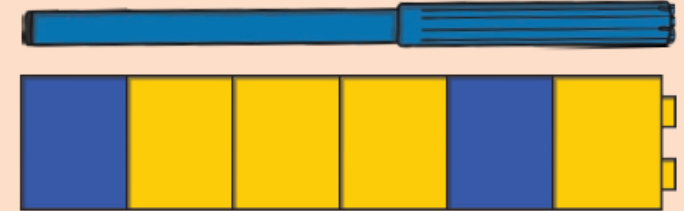
The same length.



The same height.



This pen is 6 cubes long.



0 1 2 3 4 5 6 7 8 9 10 11 12 13 14 15

This ruler is to scale.

UK Coins



1p

one

penny coin



2p

two

pence coin



5p

five

pence coin



10p

ten

pence coin



20p

twenty

pence coin



50p

fifty

pence coin



£1

one

pound coin



£2

two

pound coin

UK Notes



£5

5 pound



£10

10 pound



£20

20 pound

Counting in Coins



Days of the Week

Monday

Tuesday

Wednesday

Thursday

Friday

Saturday

Sunday

Months of the Year

January

February

March

April

May

June

July

August

September

October

November

December

MONTHS AND SEASONS

WINTER

DECEMBER



JANUARY

FEBRUARY



SUMMER

JUNE



JULY

AUGUST



SPRING

MARCH



APRIL

MAY



AUTUMN

SEPTEMBER



OCTOBER

NOVEMBER



Which of these clocks shows the time 6 o'clocks?



Which of these clocks shows the time 9 o'clocks?



Which of these clocks shows the time 4 o'clocks?



Which of these clocks shows the time 8 o'clocks?

